

Name: _____

Date: _____

Counting By Ten's

Write the words for following numbers in the boxes below each number

10

20

30

40

50

60

70

80

90

100




Name: _____

Date: _____


Counting By Ten's

Write the missing numbers


10




30




50



70



90



Name: _____

Date: _____

Counting By Ten's

Write the missing numbers in each circle.

